


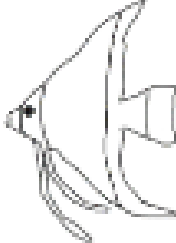
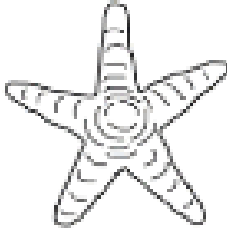



Last week one of the Maths tasks was about ordinal numbers. An **ordinal number** is a number that tells the position of something in a list, such as 1st, 2nd, 3rd, 4th, 5th etc. **Ordinal** numbers tell you what **order** the numbers go in.

Complete these ordinal number activities.

					
butterfly	spider	beetle	fish	starfish	seahorse

If the butterfly is the first animal...

1. Which animal is fourth? _____
2. Which place is the starfish in? _____
3. Which place is the spider in? _____
4. Which animal is 3rd? _____
5. Which animal is last? _____
6. Colour the second animal red. _____
7. Colour the 6th animal green. _____

Look at the image below. You have been given a total number of people and a certain number of people are **already inside**. Work out the position of the underlined person.



There are **8** people altogether what is the position of the underlined person?