


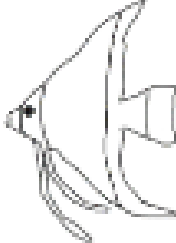
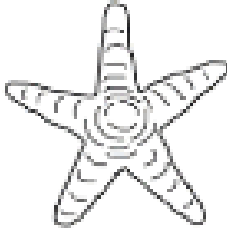



Last week one of the Maths tasks was about ordinal numbers. An **ordinal number** is a number that tells the position of something in a list, such as 1st, 2nd, 3rd, 4th, 5th etc. **Ordinal** numbers tell you what **order** the numbers go in.

Complete these ordinal number activities.

					
butterfly	spider	beetle	fish	starfish	seahorse

If the butterfly is the first animal...

1. Which animal is fourth? fish
2. Which place is the starfish in? fifth 5th
3. Which place is the spider in? second 2nd
4. Which animal is 3rd? beetle
5. Which animal is last? seahorse
6. Colour the second animal red. _____
7. Colour the 6th animal green. _____

Look at the image below. You have been given a total number of people and a certain number of people are **already inside**.

Work out the position of the underlined person.



There are **8** people altogether what is the position of the underlined person? fourth 4th