
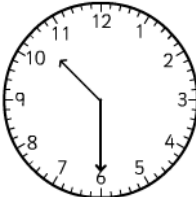
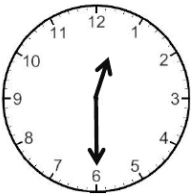





Write the times the clocks show and write and draw what you did yesterday at each time.

<div data-bbox="134 277 743 356"><div></div></div> <div data-bbox="140 369 336 564"></div> <div data-bbox="113 775 746 860"><div></div><div></div><div></div></div>	<div data-bbox="817 277 1426 356"><div></div></div> <div data-bbox="807 369 1003 564"></div> <div data-bbox="836 775 1465 860"><div></div><div></div><div></div></div>
<div data-bbox="134 913 743 992"><div></div></div> <div data-bbox="137 1016 328 1209"></div> <div data-bbox="113 1406 746 1491"><div></div><div></div><div></div></div>	<div data-bbox="817 913 1426 992"><div></div></div> <div data-bbox="807 1008 1003 1202"></div> <div data-bbox="836 1406 1465 1491"><div></div><div></div><div></div></div>
<div data-bbox="143 1543 753 1621"><div></div></div> <div data-bbox="137 1637 341 1836"></div> <div data-bbox="113 2047 746 2132"><div></div><div></div><div></div></div>	<div data-bbox="807 1543 1417 1621"><div></div></div> <div data-bbox="813 1637 1003 1830"></div> <div data-bbox="836 2047 1465 2132"><div></div><div></div><div></div></div>