


Turns and angles

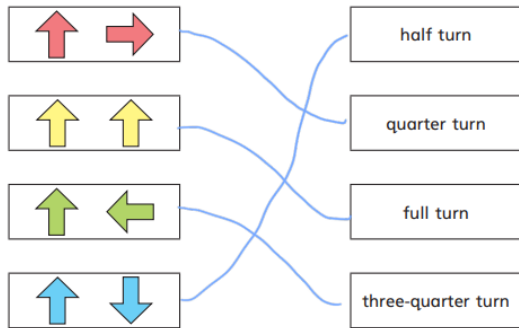
- 1 Which pictures show at least one angle? Tick your answers.



Compare answers with a partner.

- 2 The arrows are being turned clockwise.

Match the picture to the turn.

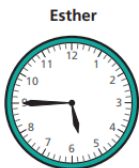


- 5 Esther and Brett are showing what time it will be in a quarter of an hour.

Here is the time now.



Here are their answers.

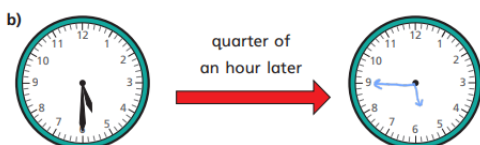


Who is correct?

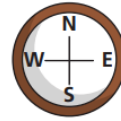
Brett

Talk about it with a partner.

- 6 Draw hands on the clocks to show the new times.



- 3 Here is a compass.



- a) Aisha is facing north.

She turns a quarter turn clockwise.

What direction is she facing now?

East

- b) Tommy is facing north.

He turns a quarter turn anticlockwise.

What direction is he facing now?

West

- c) Annie is facing east.

She turns a three-quarter turn clockwise.

What direction is she facing now?

North

- 4 Mo and Eva are answering a question.

Mr Lee is facing west. He turns a half turn.
What direction is he facing now?



Mo

I cannot answer this because we don't know what direction he turns in.



Eva

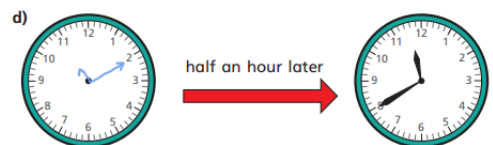
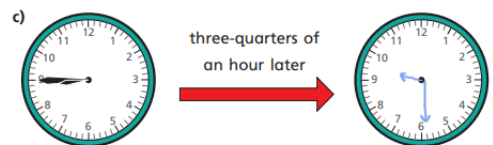
It does not matter about the direction!

Who do you agree with?

Eva

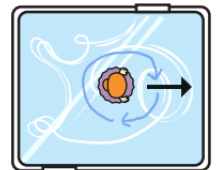
Talk about it with a partner.

© White Rose Maths 2020



- 7 A figure skater is facing the direction shown.

She turns a quarter turn clockwise and then a three-quarter turn clockwise.



- a) Draw on the picture to show that she ends up facing the same way as she started.

- b) What other turns could she make and still end up facing the same way?

Various answers

Compare answers with a partner.