


Activity 5 – Maths Challenge

Challenge 1

Eric bakes these two trays of muffins.



He eats 2 muffins.


His dad eats 3 muffins.

His sister eats 4 muffins.

How many muffins does he have left?

Challenge 2

Lola buys this key ring.




Her mum gives a quarter of the money.

She pays for the rest herself.

How much does she pay herself?

Challenge 3



How old is the teacher?

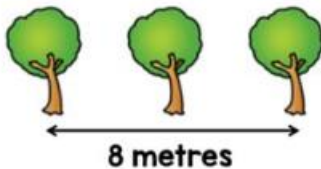
Challenge 4

Ten trees are planted in a row.



The trees are spaced out equally.

The distance between the fourth and sixth tree is 8 metres.



What is the distance between the first and last tree?

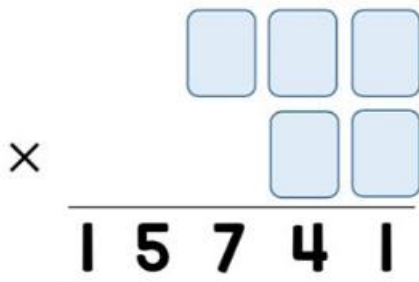
Challenge 5

Filip has these five digit cards.



He uses all of the cards to make a three-digit number and a two-digit number.

He multiplies the two numbers together and the answer is **15,741**.



What are the two numbers Filip makes?